



Aşağıda sayı abaküsü ile verilen üç basamaklı doğal sayıları bulalım ve okunuşlarını yazalım-1

Yüzlük	Onluk	Birlik
432		
Dört yüz otuz iki		

Yüzlük	Onluk	Birlik
.....		
.....		

Yüzlük	Onluk	Birlik
.....		
.....		

www.omeruslu06.com

Yüzlük	Onluk	Birlik
.....		
.....		

Yüzlük	Onluk	Birlik
.....		
.....		

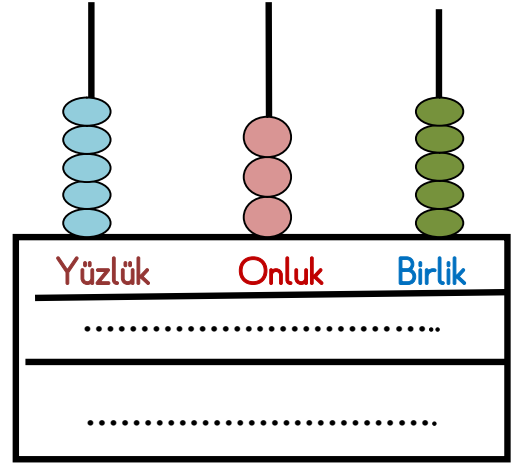
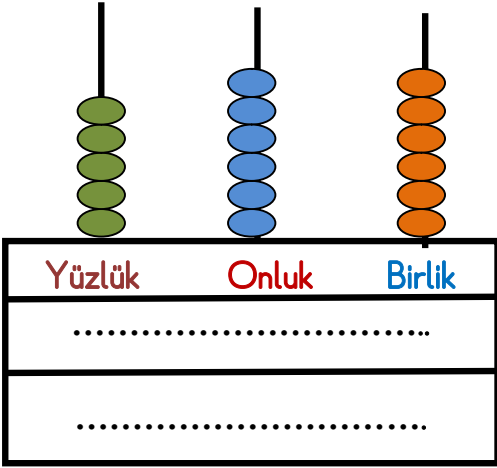
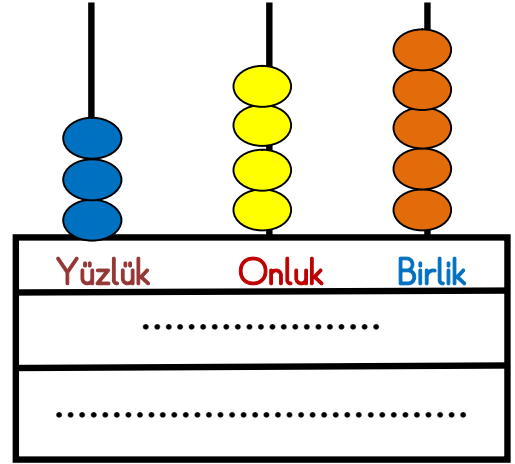
Yüzlük	Onluk	Birlik
.....		
.....		

Yüzlük	Onluk	Birlik
.....		
.....		

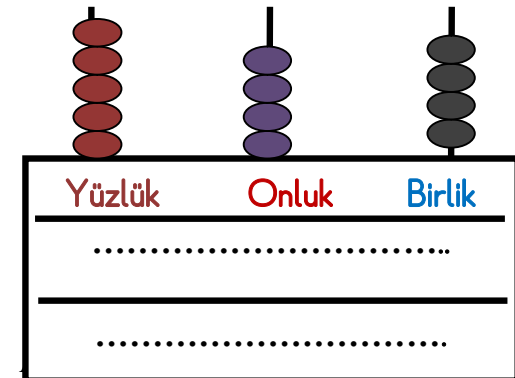
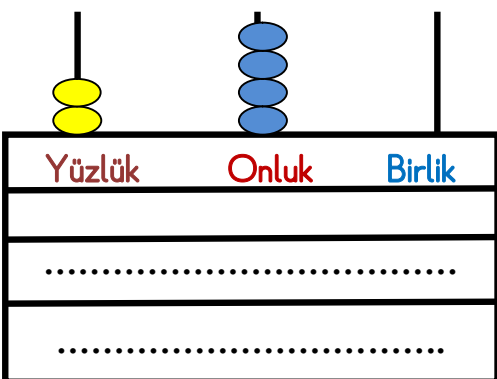
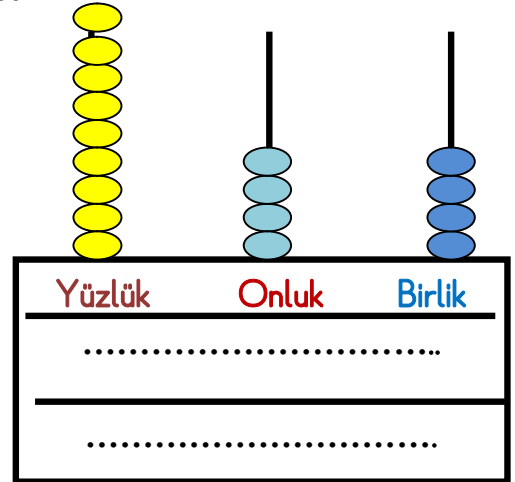
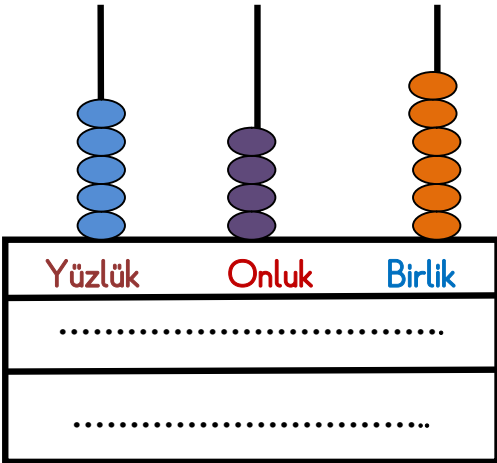
Yüzlük	Onluk	Birlik
.....		
.....		



Aşağıda sayı abaküsü ile verilen üç basamaklı doğal sayıları bulalım ve okunuşlarını yazalım-2

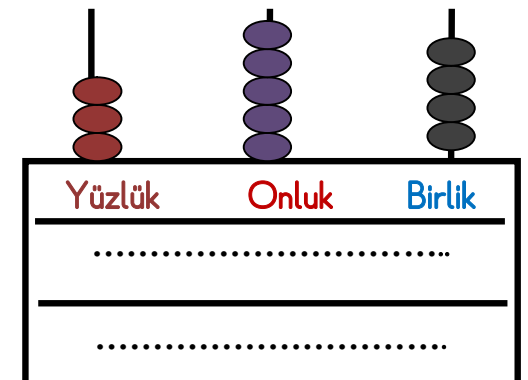
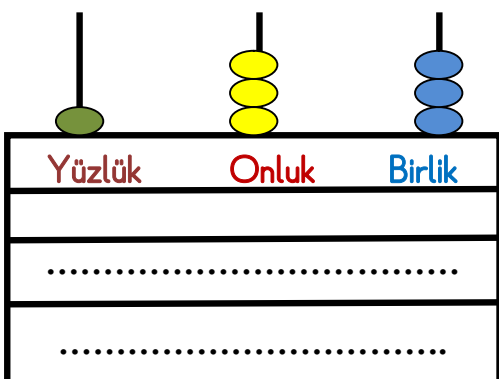
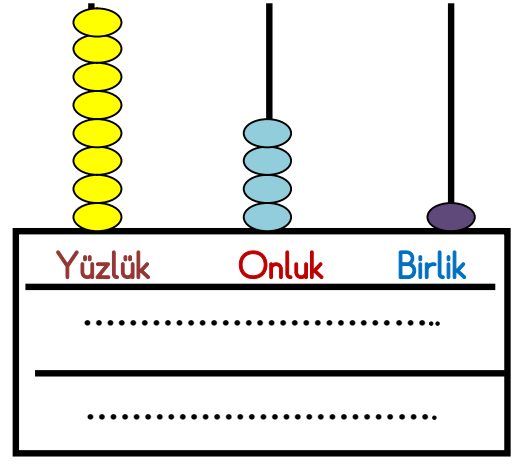
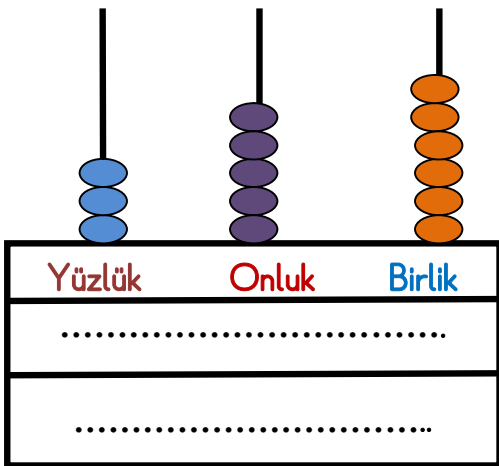
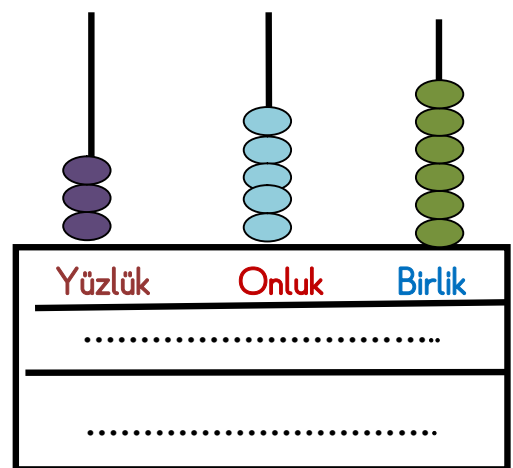
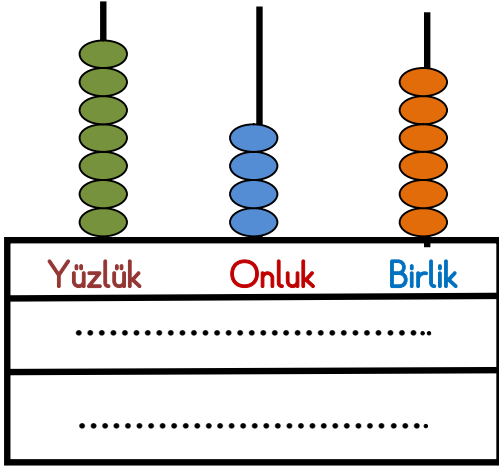
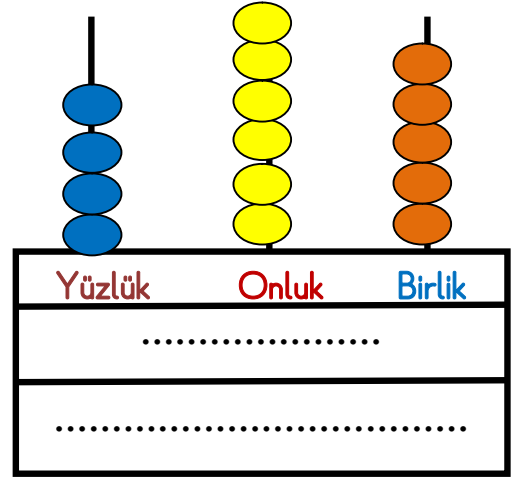
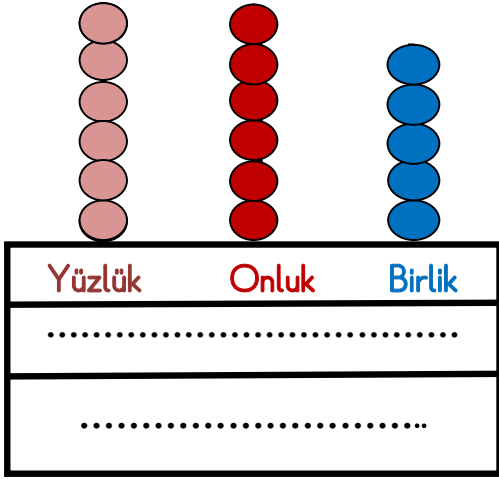


www.omeruslu06.com

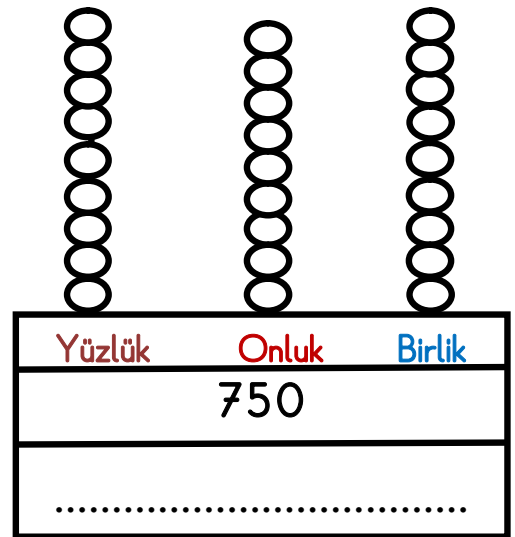
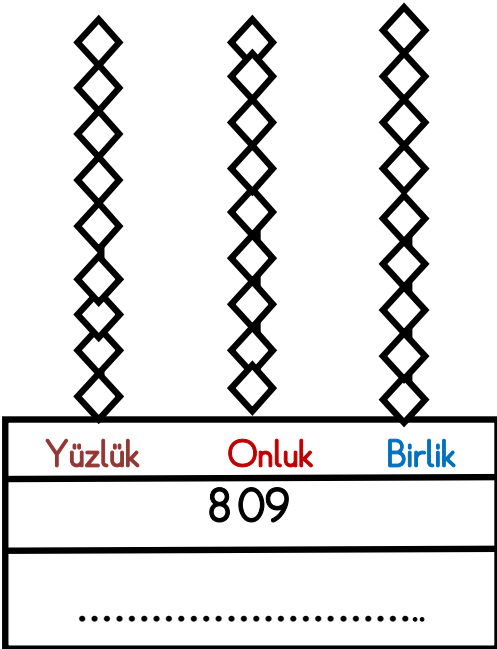
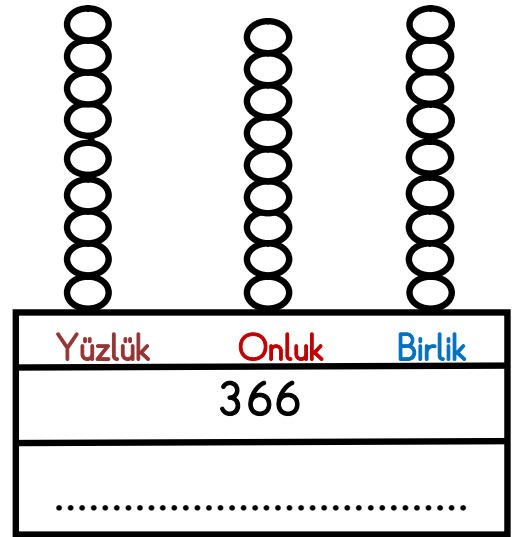
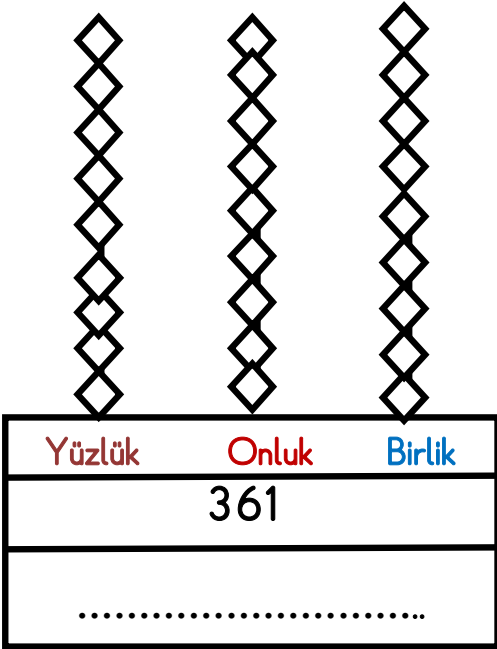
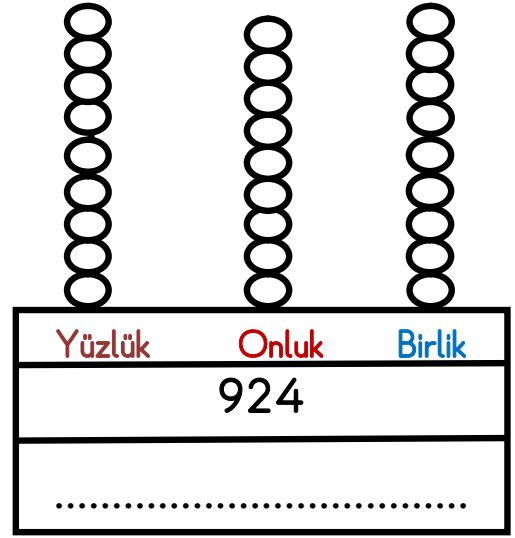
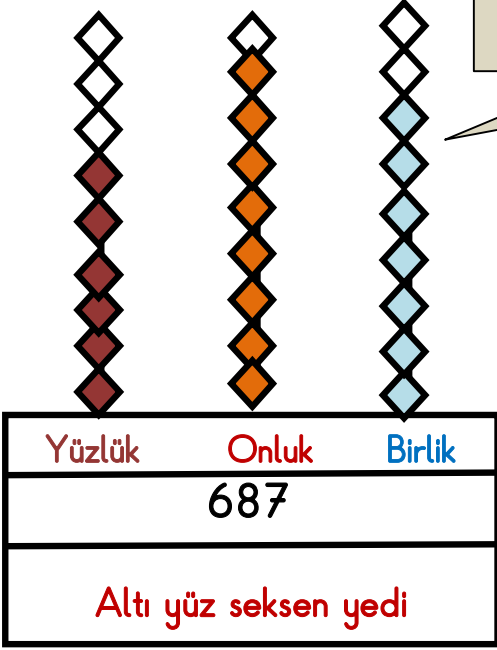




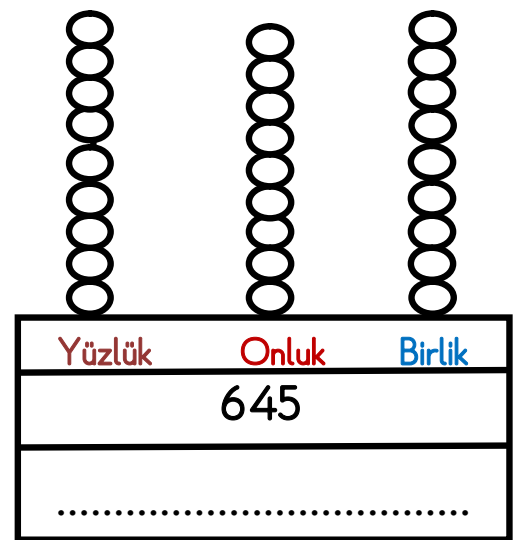
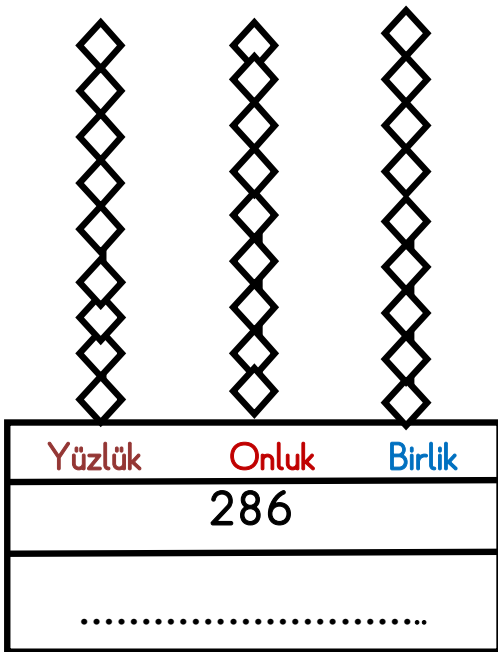
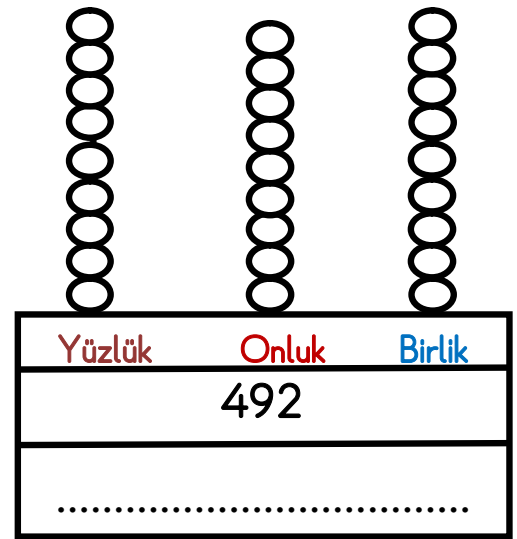
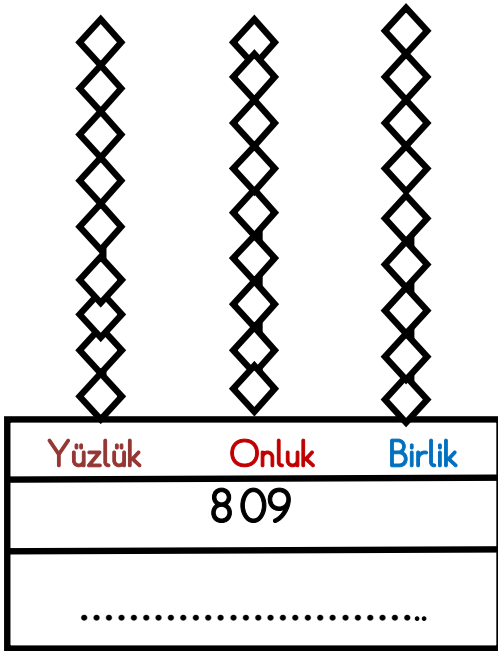
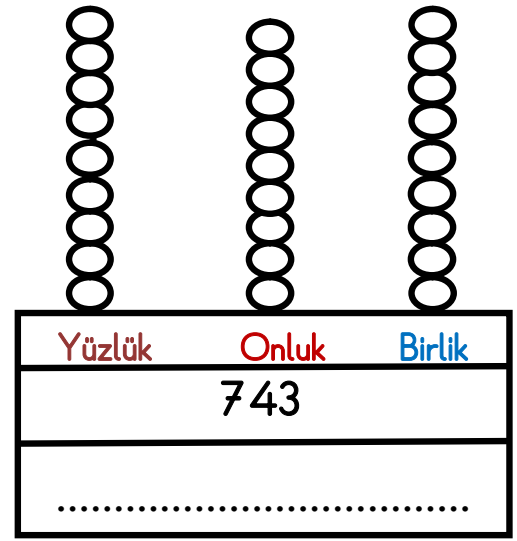
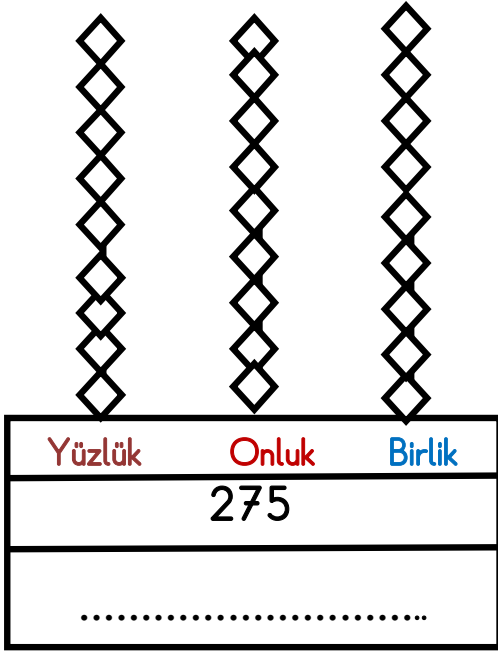
Aşağıda sayı abaküsü ile verilen üç basamaklı doğal sayıları bulalım ve okunuşlarını yazalım-3



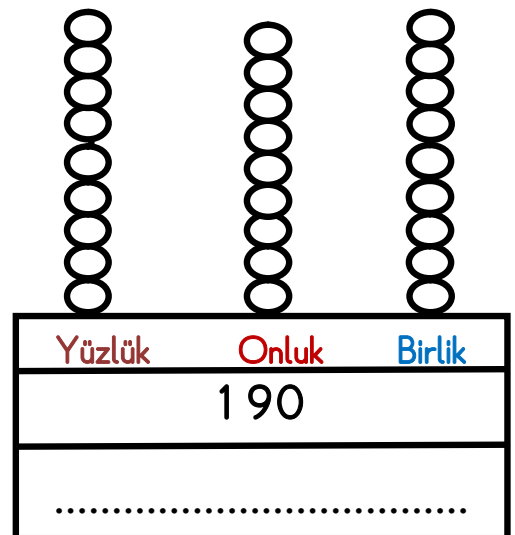
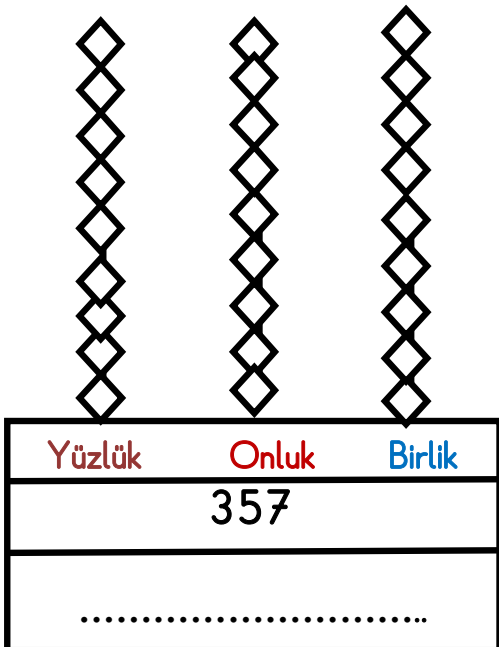
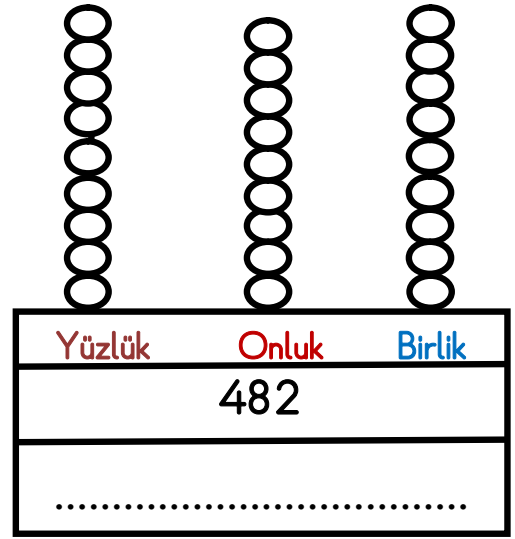
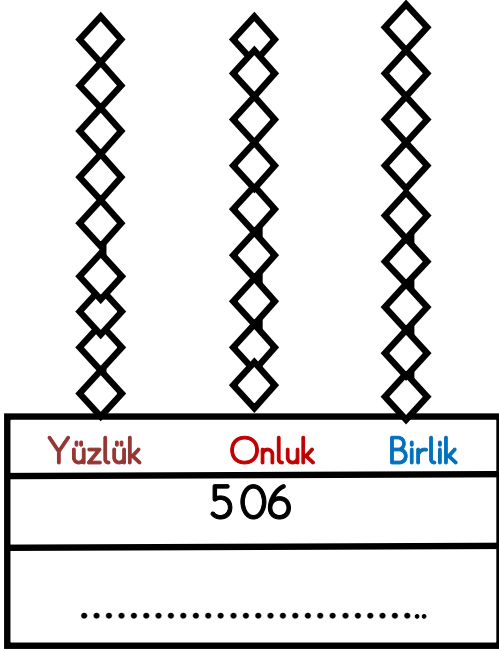
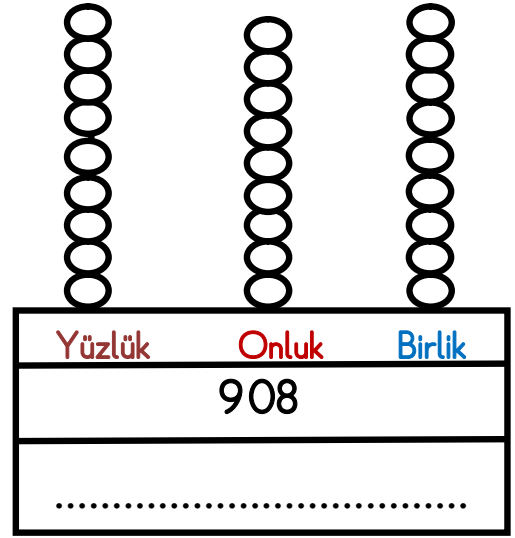
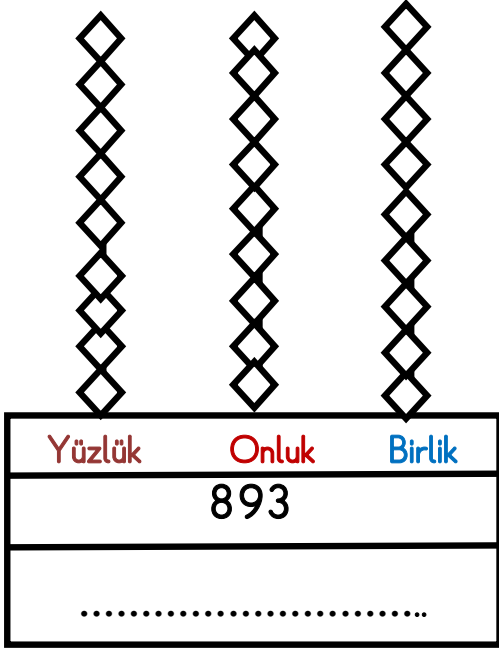
Aşağıda verilen sayıları abaküs üzerinde gösterelim , okunuşlarını yazalım-4



Aşağıda verilen sayıları abaküs üzerinde gösterelim , okunuşlarını yazalım-5 -



Aşağıda verilen sayıları abaküs üzerinde gösterelim , okunuşlarını yazalım-6 -

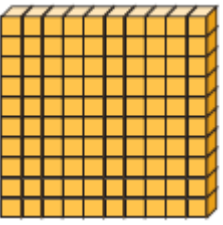
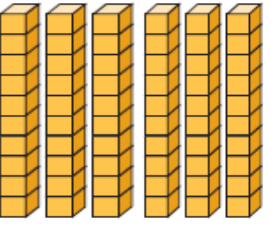

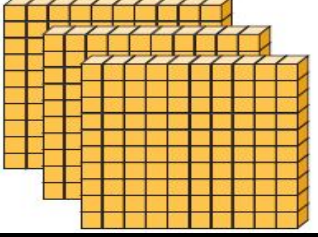
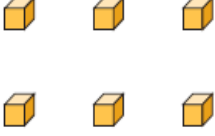
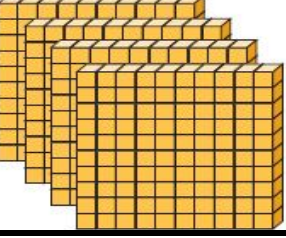
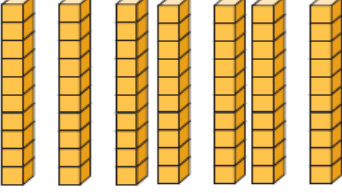
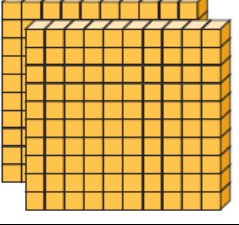


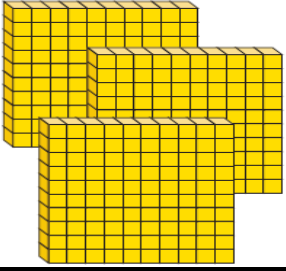
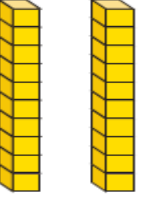
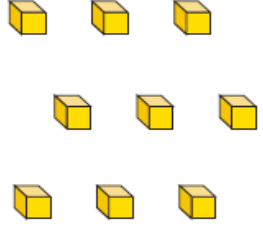
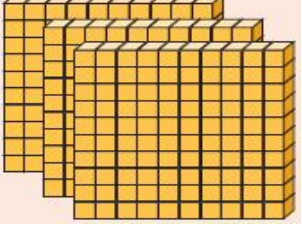
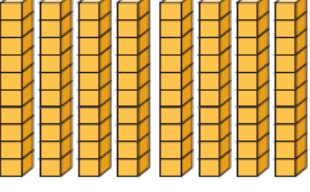

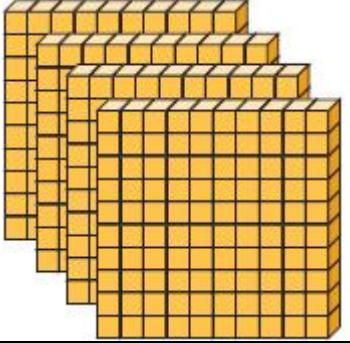
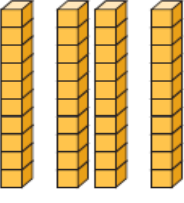




Tabloda verilen onluk taban bloklarının belirttiği sayıyı ve okunuşunu yazalım-7

Yüzlük	Onluk	Birlik	Sayı	Okunuşu
			.....	..... ..... ..... .....
			.....	..... ..... .....
			.....	..... ..... .....
			.....	..... ..... .....
			.....	..... ..... .....
			.....	..... ..... .....



			.....	..... ..... ..... .....
			.....	..... ..... ..... .....
			.....	..... ..... ..... .....
			.....	..... ..... ..... .....
			.....	..... ..... ..... .....
			.....	..... ..... ..... .....
			.....	..... ..... ..... .....


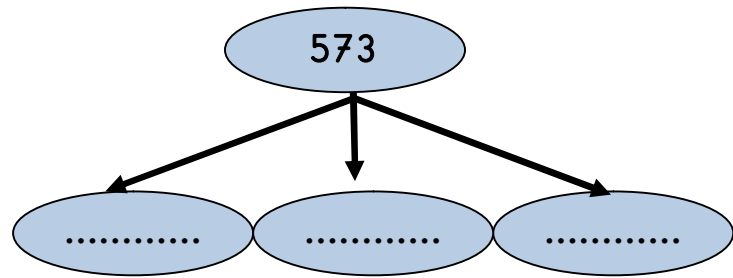
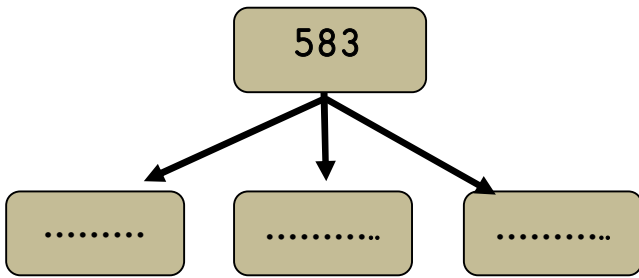

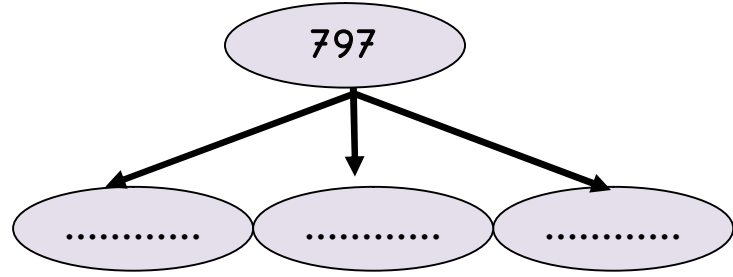
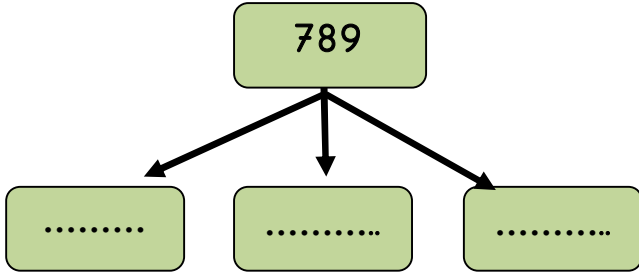
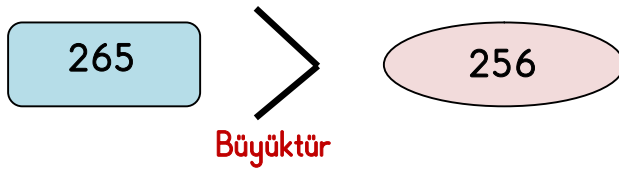
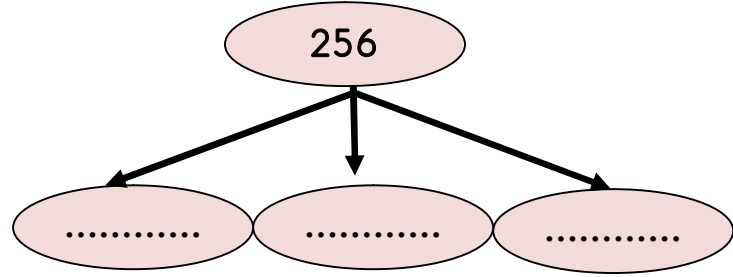
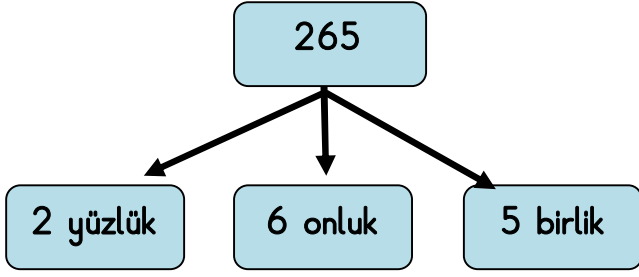
www.omerulu06.com







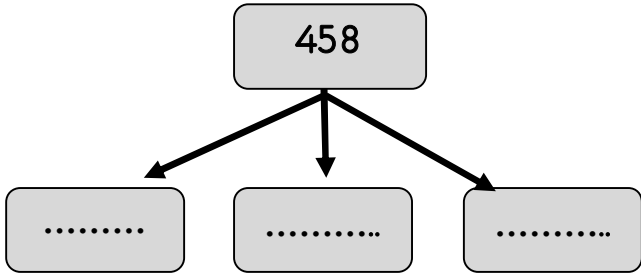
Aşağıda verilen sayıları yüzlük ,onluk ve birliklerine ayıralım.-9-



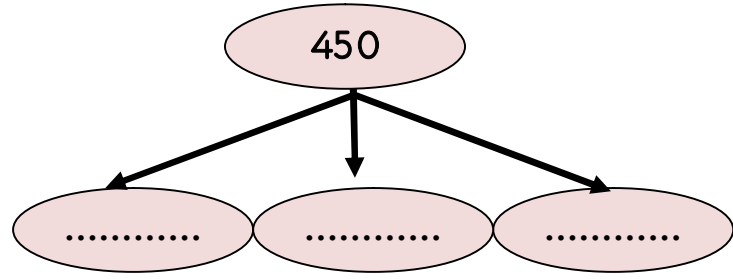
Verilen söz, vaktinde verilmesi gereken bir borçtur. Hz.Ali (r.a.)



Aşağıda verilen sayıları yüzlük onluk ve birliklerine ayıralım-1 0-

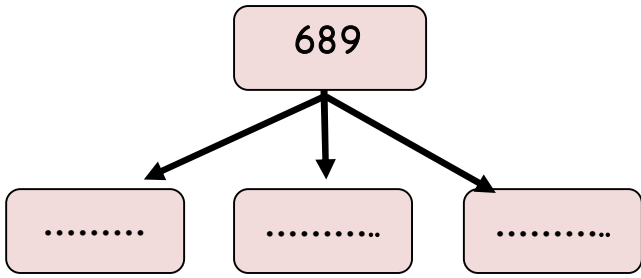


458

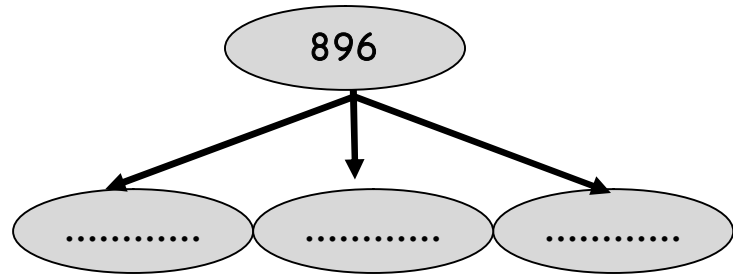


450

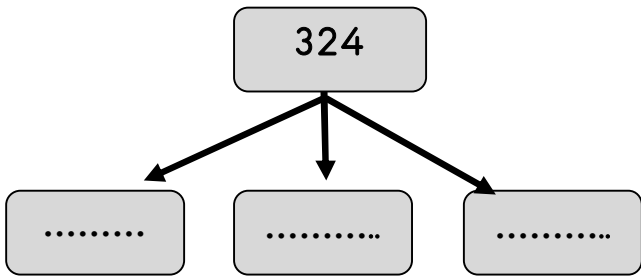
[www.omeruslu06.com](http://www.omeruslu06.com)



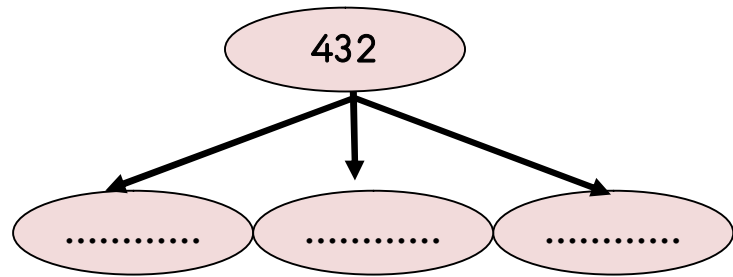
689




896



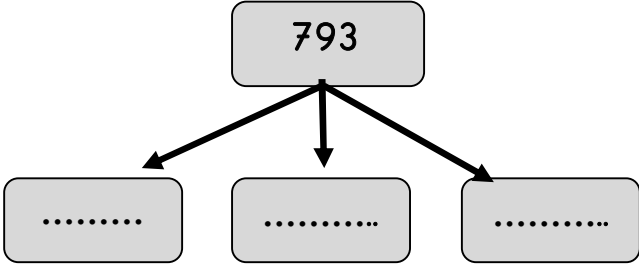
324



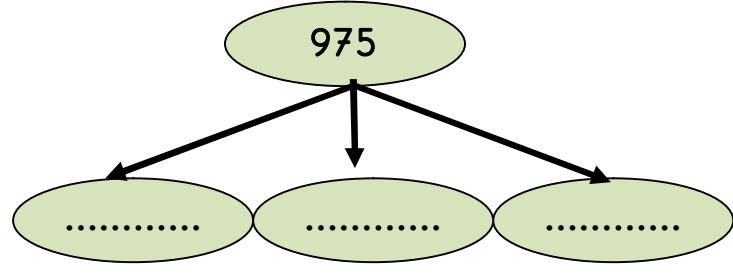
432



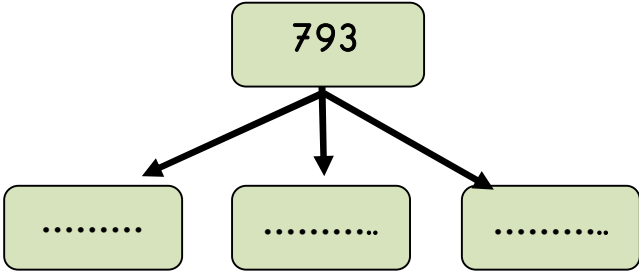
Aşağıda verilen sayıları yüzlük onluk ve birliklerine ayıralım.-11



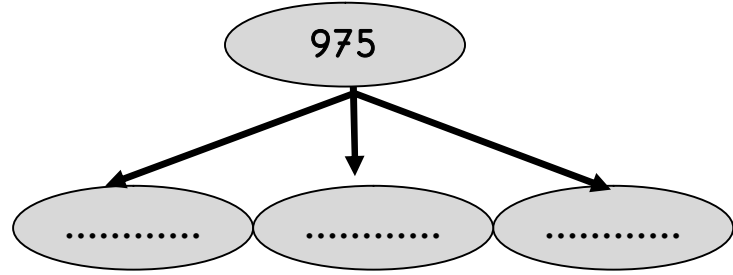
265



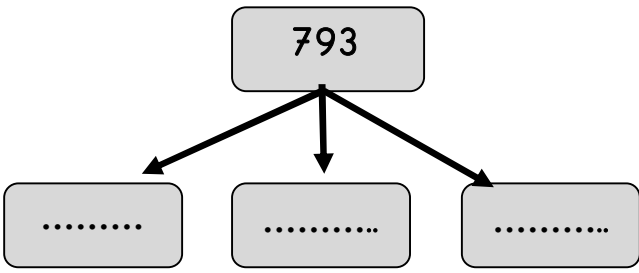
256



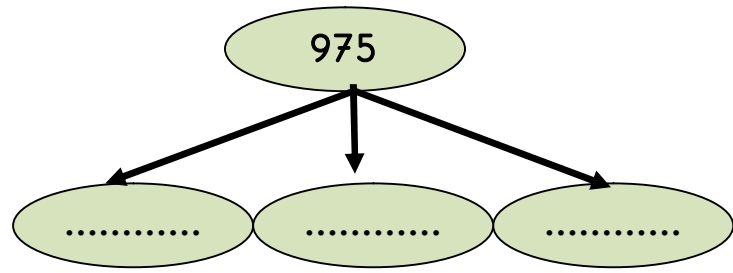
265



256



265



256



Aşağıdaki sayıların arasına " $<$ ,  $>$  ve  $=$ " sembollerinden uygun olanı yerleştiriniz.

www.omeruslu06.com

$8 \quad \bigcirc \quad 9$

$19 \quad \bigcirc \quad 13$

$66 \quad \bigcirc \quad 37$

$25 \quad \bigcirc \quad 46$

$19 \quad \bigcirc \quad 53$

$75 \quad \bigcirc \quad 44$

$54 \quad \bigcirc \quad 78$

$65 \quad \bigcirc \quad 68$

$36 \quad \bigcirc \quad 90$

$326 \quad \bigcirc \quad 458$

$578 \quad \bigcirc \quad 545$

$687 \quad \bigcirc \quad 876$

$564 \quad \bigcirc \quad 356$

$102 \quad \bigcirc \quad 308$

$412 \quad \bigcirc \quad 421$

$248 \quad \bigcirc \quad 235$

$478 \quad \bigcirc \quad 320$

$627 \quad \bigcirc \quad 792$

$389 \quad \bigcirc \quad 389$

$936 \quad \bigcirc \quad 854$

$658 \quad \bigcirc \quad 359$

Aşağıdaki sayıların arasında " $<$ ,  $>$  ve  $=$ " sembollerinden uygun olanı yerleştiriniz.

$789 \quad \bigcirc \quad 652$

$754 \quad \bigcirc \quad 689$

$685 \quad \bigcirc \quad 327$

$147 \quad \bigcirc \quad 110$

$745 \quad \bigcirc \quad 893$

$975 \quad \bigcirc \quad 975$

$254 \quad \bigcirc \quad 589$

$789 \quad \bigcirc \quad 654$

$598 \quad \bigcirc \quad 356$

$569 \quad \bigcirc \quad 569$

$489 \quad \bigcirc \quad 409$

$890 \quad \bigcirc \quad 908$

$936 \quad \bigcirc \quad 937$

$512 \quad \bigcirc \quad 325$

$917 \quad \bigcirc \quad 745$

$625 \quad \bigcirc \quad 320$

$430 \quad \bigcirc \quad 220$

$789 \quad \bigcirc \quad 897$

$129 \quad \bigcirc \quad 830$

$487 \quad \bigcirc \quad 487$

$321 \quad \bigcirc \quad 569$

$287 \quad \bigcirc \quad 287$

$478 \quad \bigcirc \quad 532$

$258 \quad \bigcirc \quad 792$

Aşağıdaki sayıların arasına " $<$ ", " $>$ " ve " $=$ " sembollerinden uygun olanı yerleştiriniz.

$25 \bigcirc 25$

$48 \bigcirc 54$

$78 \bigcirc 98$

$90 \bigcirc 63$

$27 \bigcirc 53$

$75 \bigcirc 67$

$19 \bigcirc 78$

$68 \bigcirc 68$

$70 \bigcirc 88$

$458 \bigcirc 458$

$604 \bigcirc 483$

$479 \bigcirc 248$

$564 \bigcirc 389$

$283 \bigcirc 308$

$239 \bigcirc 123$

$589 \bigcirc 235$

$473 \bigcirc 320$

$489 \bigcirc 792$

$781 \bigcirc 328$

$385 \bigcirc 854$

$359 \bigcirc 359$

Aşağıdaki sayıların arasına " $<$ ", " $>$ " ve " $=$ " sembollerinden uygun olanı yerleştiriniz.

$486 \bigcirc 652$

$754 \bigcirc 197$

$685 \bigcirc 327$

$653 \bigcirc 258$

$745 \bigcirc 893$

$975 \bigcirc 975$

$789 \bigcirc 589$

$654 \bigcirc 654$

$598 \bigcirc 356$

$569 \bigcirc 569$

$489 \bigcirc 875$

$890 \bigcirc 895$

$444 \bigcirc 937$

$489 \bigcirc 896$

$286 \bigcirc 745$

$709 \bigcirc 205$

$430 \bigcirc 220$

$789 \bigcirc 601$

$236 \bigcirc 830$

$487 \bigcirc 487$

$321 \bigcirc 569$

$459 \bigcirc 790$

$336 \bigcirc 532$

$792 \bigcirc 792$



Aşağıdaki sayıların arasına " $<$ ", " $>$ " ve " $=$ " sembollerinden uygun olanı yerleştiriniz.

www.omerulu06.com



Aşağıda okunuşları verilen doğal sayıları rakamlarla yazınız.





Aşağıdaki bulutlarda çözümlenmiş sayılarla , şemsiyedeki sayıları eşleştirelim.

Adı Soyadı:.....

6 yüzlük  
4 onluk  
7 birlik

8 yüzlük  
7 birlik

3 yüzlük  
5 onluk

9 yüzlük  
4 onluk  
7 birlik

807



947



350



647



9 yüzlük  
8 birlik

5 yüzlük  
6 onluk  
3 birlik

4 yüzlük  
2 onluk  
3 birlik

6 yüzlük  
7 onluk

423



563



908



670



2 yüzlük  
3 onluk  
7 birlik

5 yüzlük

1 yüzlük  
9 onluk  
8 birlik

6 yüzlük  
2 onluk  
4 birlik

198



624



500



237







Aşağıda verilen sayıların okunuşlarını yazalım .  
Adı Soyadı:.....

326



.....  
.....

396



.....  
.....

485



.....  
.....

948



.....  
.....

740



.....  
.....

741



.....  
.....

808



.....  
.....

101



.....  
.....

396



.....  
.....

807



.....  
.....

Aşağıda verilen sayıların okunuşlarını yazalım .  
Adı Soyadı:.....

807



.....  
.....

947



.....  
.....

350



.....  
.....

647



.....  
.....

198



.....  
.....

624



.....  
.....

500



.....  
.....

237



.....  
.....

423



.....  
.....

563



.....  
.....

908



.....  
.....

670



.....  
.....



Aşağıda okunuşları verilen sayıları kutulara yazalım.

www.omeruslu06.com

Altı yüz kırk sekiz

.....

Yüz yedi

.....

İki yüz yirmi iki

.....

Altı yüz elli dokuz

.....

Üç yüz yetmiş dört

.....

Yedi yüz otuz sekiz

.....

Dokuz yüz on beş

.....

Dört yüz dört

.....

Yüz yetmiş bir

.....

Altı yüz otuz üç

.....

Sekiz yüz sekiz

.....

Dokuz yüz on üç

.....

Beş yüz dokuz

.....

Dokuz yüz doksan

.....

Dokuz yüz doksan dokuz

.....

Yüz yirmi yedi

.....

Üç yüz kırk dokuz

.....

Dokuz yüz elli

.....

İki yüz otuz altı

.....

Sekiz yüz elli

.....

Beş yüz beş

.....

Altı yüz doksan dört

.....

Yedi yüz yetmiş altı

.....

Üç yüz üç

.....